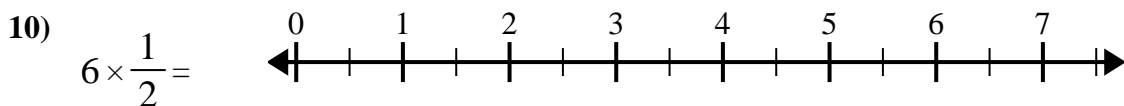
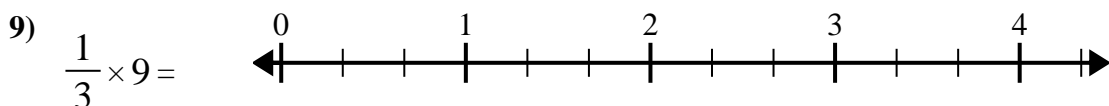
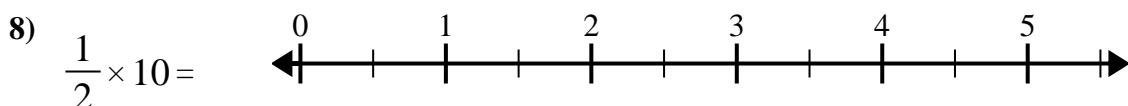
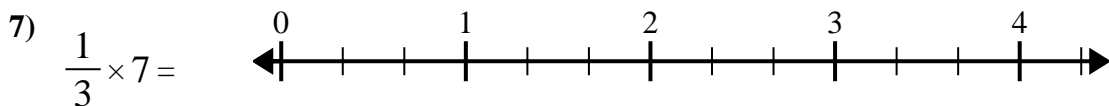
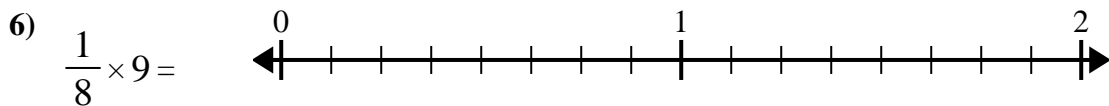
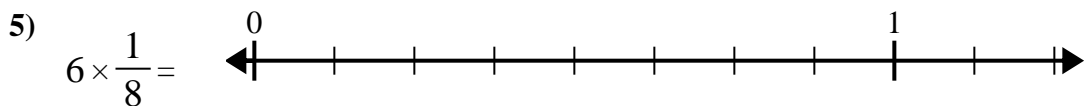
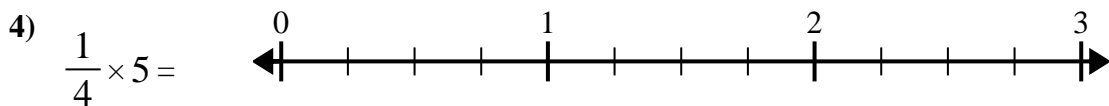
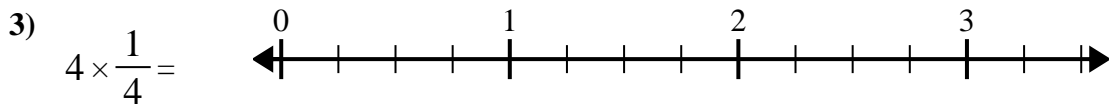
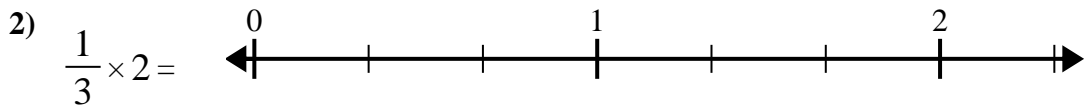
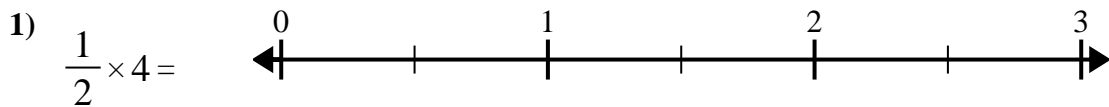




Use the numberline to solve.

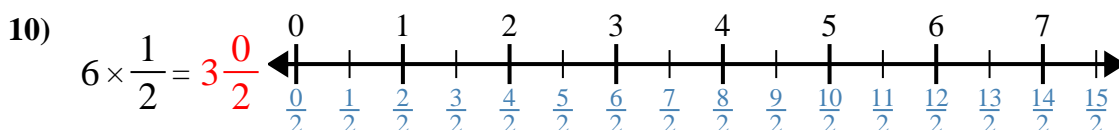
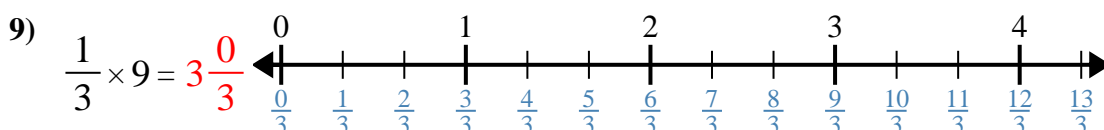
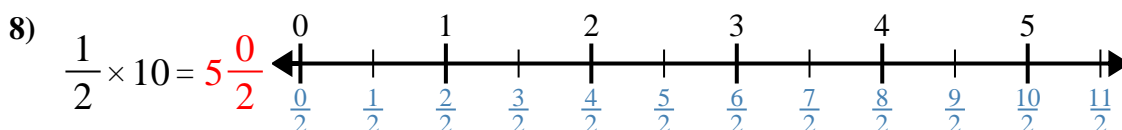
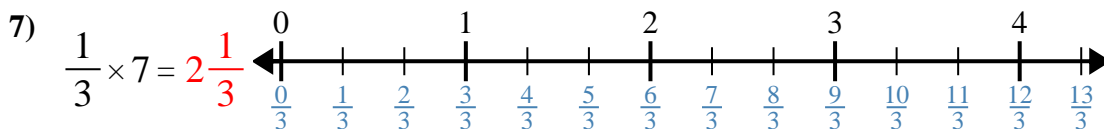
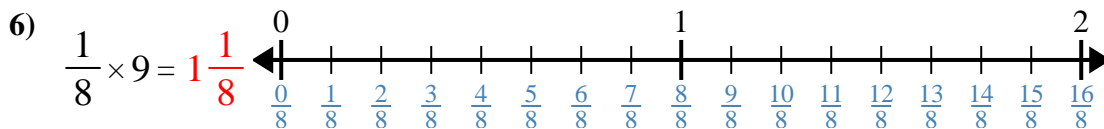
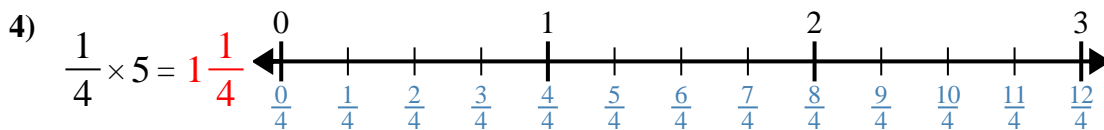
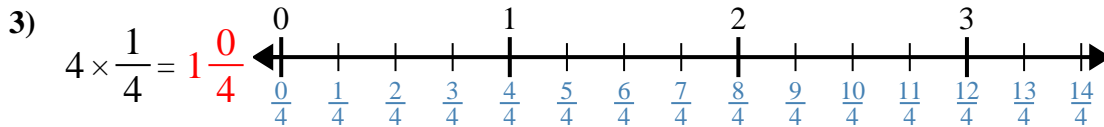
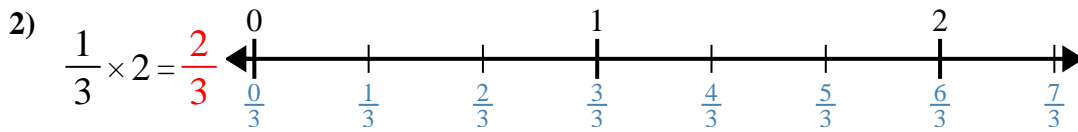
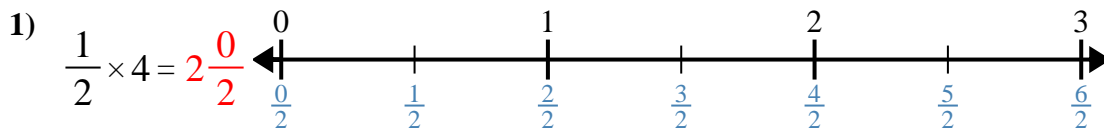


Answers

1. _____
2. _____
3. _____
4. _____
5. _____
6. _____
7. _____
8. _____
9. _____
10. _____



Use the numberline to solve.



Answers

1. $2\frac{0}{2}$
2. $\frac{2}{3}$
3. $1\frac{0}{4}$
4. $1\frac{1}{4}$
5. $\frac{6}{8}$
6. $1\frac{1}{8}$
7. $2\frac{1}{3}$
8. $5\frac{0}{2}$
9. $3\frac{0}{3}$
10. $3\frac{0}{2}$



Use the numberline to solve.

$1\frac{1}{8}$	$\frac{2}{3}$	$5\frac{0}{2}$	$3\frac{0}{3}$
$2\frac{0}{2}$	$2\frac{1}{3}$	$3\frac{0}{2}$	$\frac{6}{8}$
$1\frac{1}{4}$	$1\frac{0}{4}$		

Answers

1)

1. _____

2)

2. _____

3)

3. _____

4)

4. _____

5)

5. _____

6)

6. _____

7)

7. _____

8)

8. _____

9)

9. _____

10)

10. _____